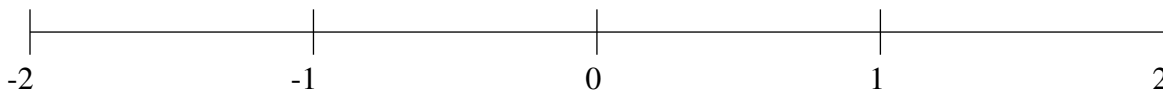


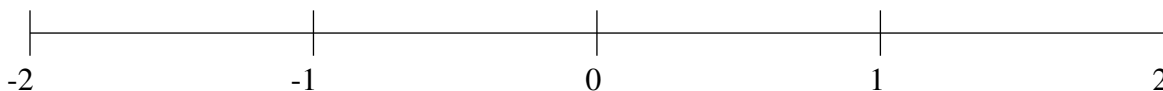
## Classification de Fractions (A)

À l'aide des droites numériques, classifiez chaque série de fractions ci-dessous en ordre croissant.

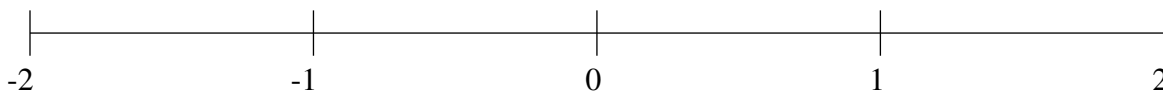
$$\frac{1}{2}, -\frac{1}{5}, 1\frac{4}{5}, -1\frac{1}{5}, \frac{4}{5}$$



$$1\frac{1}{2}, -1\frac{1}{2}, -1\frac{4}{5}, -1\frac{1}{10}, -\frac{2}{5}$$



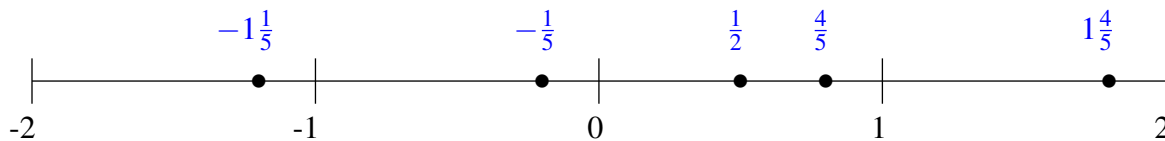
$$1\frac{2}{5}, -\frac{3}{5}, \frac{1}{2}, 1\frac{4}{5}, -1\frac{2}{5}$$



## Classification de Fractions (A) Solutions

À l'aide des droites numériques, classifiez chaque série de fractions ci-dessous en ordre croissant.

$$\frac{1}{2}, -\frac{1}{5}, 1\frac{4}{5}, -1\frac{1}{5}, \frac{4}{5}$$



$$1\frac{1}{2}, -1\frac{1}{2}, -1\frac{4}{5}, -1\frac{1}{10}, -\frac{2}{5}$$



$$1\frac{2}{5}, -\frac{3}{5}, \frac{1}{2}, 1\frac{4}{5}, -1\frac{2}{5}$$

