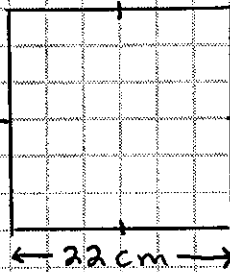
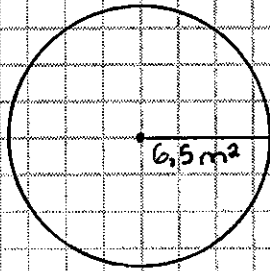



Maths 9

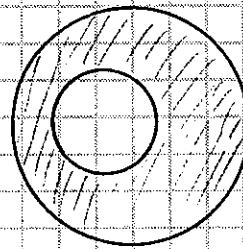
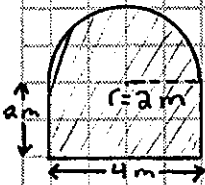
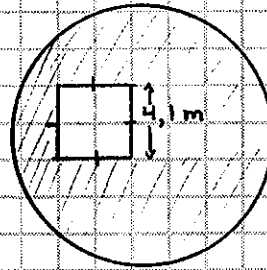
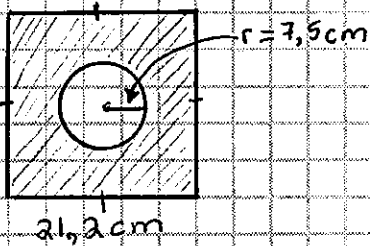
Nom: _____

Calculer Les Aires

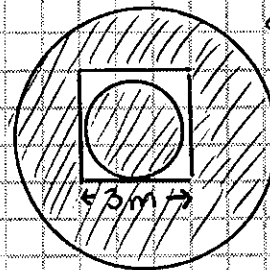
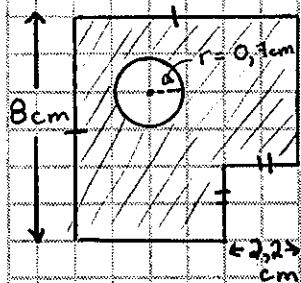


Trouvez l'aire de la région ombrée

diamètre du cercle = 15 m



rayon du petit cercle = 1,7 m
rayon du grand cercle = 4,3 m



diamètre du petit cercle = 2,7 m
diamètre du grand cercle = 7,1 m